





# Valentine's Day Math!

Name: \_\_\_\_\_


Read then solve the problems. Put your answers in the circles.

-  1. Robin wants to give Valentine cards and candy to everyone in her class. She has 23 kids in her class. She has 25 Valentine cards but only 18 packages of candy. How many more packages of candy does she need to give everyone in her class one card and one candy?




-  2. Frankie and Tony are competing to see who gets the most Valentine cards. Frankie gets 8 cards from the girls and 5 cards from the boys. Tony gets 12 cards from the girls and 2 cards from the boys. Who ended up with the most cards altogether, Frankie or Tony?




-  3. Timmy has 5 bags of chocolate with 8 pieces in each. He wants to give 1 bag to the girl he likes, 1 bag to his favorite teacher and 1 bag to his mother. If he shared 16 pieces of chocolate with his friends, will he have enough bags to give to his favorite people? Yes or no?



-  4. Naomi baked 24 heart-shaped cookies for her sister. She ate 2. She gave 3 to her mom and 3 to her dad. Her brother ate 4. How many cookies does she have left to give to her sister?



-  5. Brooke is making Valentine cards. She has 17 cards and wants to put 3 heart-shaped stickers on each. If she bought a package of 75 stickers, how many will she have left over?

