
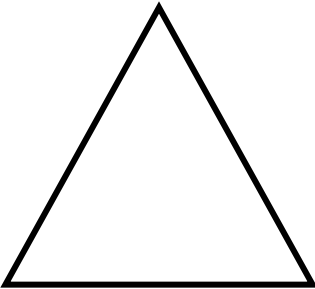


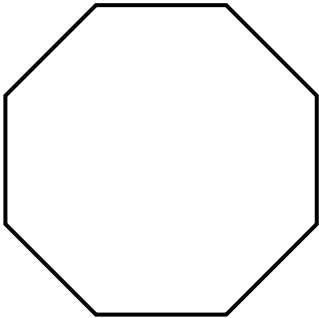


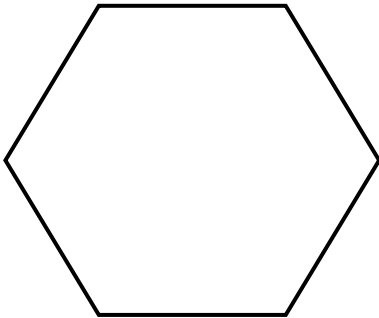


Name _____

Draw the lines of symmetry for each figure and write the number of lines.

<p>1.</p>  <p>Number of lines _____</p>	<p>2.</p>  <p>Number of lines _____</p>	<p>3.</p>  <p>Number of lines _____</p>
<p>4.</p>  <p>Number of lines _____</p>	<p>5.</p>  <p>Number of lines _____</p>	<p>6.</p>  <p>Number of lines _____</p>
<p>7.</p>  <p>Number of lines _____</p>	<p>8.</p>  <p>Number of lines _____</p>	