


Name _____

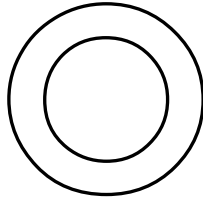
Draw the lines of symmetry for each letter and write the number of lines.

1.




Number of lines _____

2.




Number of lines _____

3.



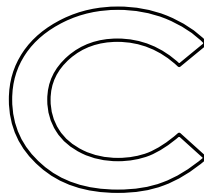
Number of lines _____

4.




Number of lines _____

5.




Number of lines _____

6.



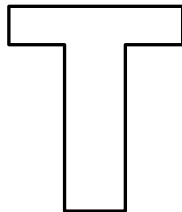
Number of lines _____

7.




Number of lines _____

8.




Number of lines _____

9.




Number of lines _____

10.



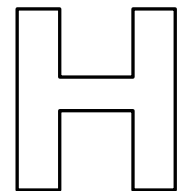
Number of lines _____

11.




Number of lines _____

12.



Number of lines _____

13.




Number of lines _____

14.



Number of lines _____

15.



Number of lines _____