



















Name \_\_\_\_\_



## How many students know how to name the presidents who are on the coins?



Thomas Jefferson								
Jonh F. Kennedy								
Lincoln								
George Washington								
Franklin D. Roosevelt								
		<b>1</b>	<b>2</b>	<b>3</b>	<b>4</b>	<b>5</b>	<b>6</b>	<b>7</b>

1. Write the number of students that recognized the president on each currency.

Thomas Jefferson \_\_\_\_\_ John F. Kennedy \_\_\_\_\_ Lincoln \_\_\_\_\_

George Washington \_\_\_\_\_ Franklin D. Roosevelt \_\_\_\_\_

2. Who is the most recognized? \_\_\_\_\_

3. Who is the least recognized? \_\_\_\_\_

4. How many different presidents are there on the coins? \_\_\_\_\_

5. How many students in total were asked these questions? \_\_\_\_\_