

Name _____

Look at the graphs and answer the questions.

1. Which graph has four umbrellas?

- A
- B
- C
- A and B


2. Which graph has more umbrellas?

- A
- B
- C
- A and B

3. Which graphs have the same amount?


- None
- B and A
- C and B
- A and C

Look at the picture and analyze the graphs below.




Fill in the circle of the graph that shows the number of clouds and umbrellas.

A.



B.



C.

