



Name \_\_\_\_\_

Look at the picture and analyze the graphs below.




Fill in the circle of the graph that shows the number of cats and dogs.


A.



B.



C.



Look at the graphs and answer the questions.

1. Which graph has two more than the other?

- A
- B
- C
- None

2. Which graph has 4 cats and 3 dogs?

- A
- B
- C
- A and B

3. Which graph has the same amount?

- A
- B
- C
- None