

Name \_\_\_\_\_

Look at the graphs and answer the questions.

1. Which graph has the least amount of animals?

- A
- B
- C
- A and B

2. Which graph has four lions and four elephants?


- A
- B
- C
- A and B

3. Which graphs have equal amounts?

- A and B
- B and C
- C and A
- All of them


Name \_\_\_\_\_

Look at the picture and analyze the graphs below.




Fill in the circle of the graph that shows the number elephants and lions.

A.



B.



C.

