



Name _____



Look at the graphs and answer the questions.



1. Which graph has more  than  ?

- A
- B
- C
- A and B




2. Which graph has two  and two  ?

- A
- B
- C
- A and B

3. Which graphs have equal amounts?


- A and B
- B and C
- C and A
- None of them

Look at the picture and analyze the graphs below.




Fill in the circle of the graph that shows the number of cones.

A.



B.



C.

