



Name _____

Look at the picture and analyze the graphs below.




Fill in the circle of the graph that shows the number of octopuses and dolphins.


A.




B.




C.



Look at the graphs and answer the questions.

1. Which graph has the least amount of  dolphins?

- A
- B
- C
- A and C

2. Which graph has three  ?

- A and B
- B and C
- C and A
- A and B

3. Which graph has the same amount of  and  ?

- A
- B
- C
- A and B