



Name _____

Look at the picture and analyze the graphs below.




Fill in the circle of the graph that shows the number of burros and sheep.


A.



B.



C.



Look at the graphs and answer the questions.

1. Which graph has 1 more sheep than burros?

- A
- B
- C
- A and B

2. Which graph has 3 burros and 4 sheep?

- A
- B
- C
- A and B

3. Which graph has 2 burros?

- A
- B
- C
- A and B