








Name _____

How many pumpkins are there?

Pumpkin Pies	
Apple Pies	
Pecan Pies	
Coconut Pies	
Lemon Pies	

1. How many pumpkin pies are there?

- 7
- 5
- 8

2. How many apple pies are there?

- 5
- 8
- 3

3. How many pies are there in all?

- 10
- 17
- 16

4. Which type of pie has the least amount?

- pumpkin
- apple
- lemon
- pecan
- coconut

5. Which type of pie has the most amount?

- pumpkin
- apple
- lemon
- pecan
- coconut

6. Which type of pies have the same amount?

- coconut and pecan
- coconut and apple
- lemon and pumpkin