


Everyday Fractions

Write the correct fraction for each of the figures.

$\frac{3}{2}$

$\frac{3}{5}$



Fraction:
Slices with
seeds.


$$\frac{3}{8}$$

$\frac{1}{3}$

$\frac{5}{4}$




Fraction:
Missing slice

$$\frac{\quad}{\quad}$$



Fraction:
Glass with lines

$$\frac{\quad}{\quad}$$


Fraction:
Moon face
with light

$$\frac{\quad}{\quad}$$


Fraction:
Missing slice

$$\frac{\quad}{\quad}$$


Fraction:
Missing slices

$$\frac{\quad}{\quad}$$


Fraction:
Missing piece

$$\frac{\quad}{\quad}$$