

# Fraction Practice

Write the correct fraction for each of the figures.

$\frac{3}{2}$

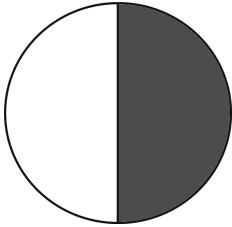
$\frac{3}{5}$



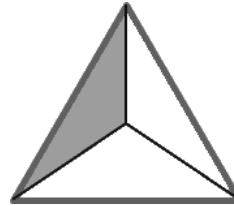
$$\frac{2}{5}$$

$\frac{1}{3}$

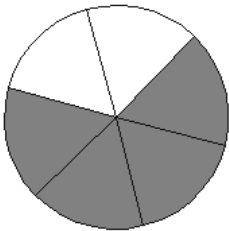
$\frac{5}{4}$



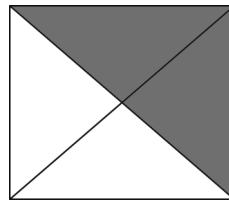
$$\frac{\quad}{\quad}$$



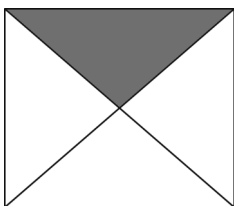
$$\frac{\quad}{\quad}$$




$$\frac{\quad}{\quad}$$



$$\frac{\quad}{\quad}$$



$$\frac{\quad}{\quad}$$



$$\frac{\quad}{\quad}$$