

Nombre \_\_\_\_\_

$\frac{3}{5}$

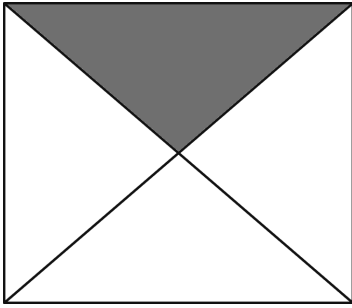
$\frac{3}{2}$

# Fracciones

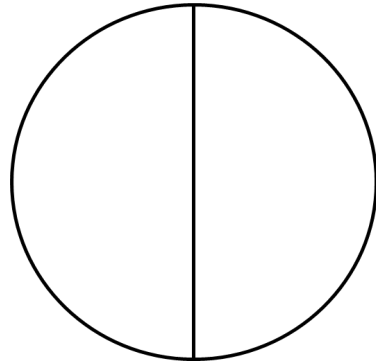
$\frac{4}{5}$

$\frac{1}{3}$

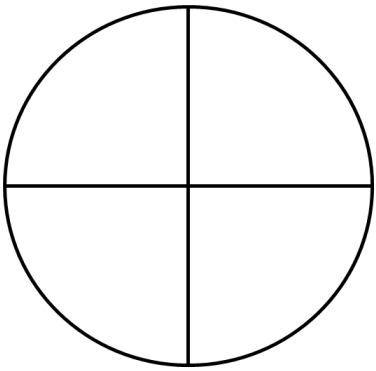
Colorea la fracción .




$\frac{1}{4}$



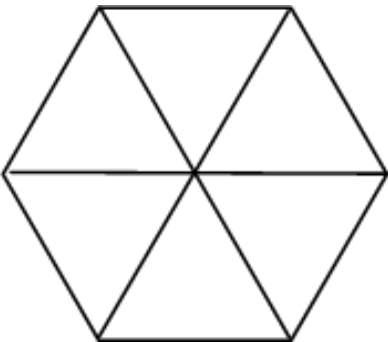
$\frac{1}{2}$



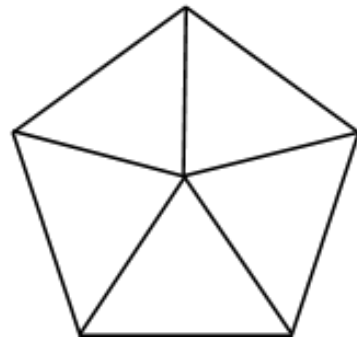
$\frac{3}{4}$



$\frac{2}{4}$



$\frac{2}{6}$



$\frac{4}{5}$