

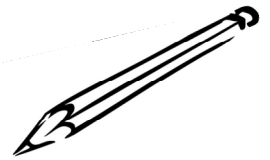

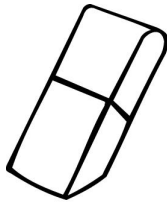
# School Supplies Graph 1

4

3

2

1

Cut out the squares below and paste them to the correct column. Which column has the most supplies? Which has the least supplies?
