

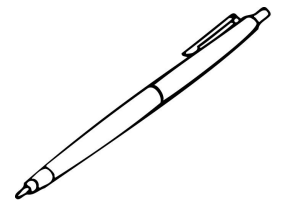


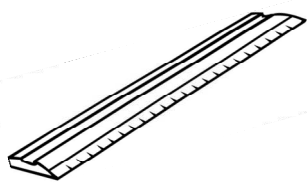
# School Supplies Graph 2

4

3

2

1

Cut out the squares below and paste them to the correct column.  
Which column has the most supplies? Which has the least supplies?

