






# ¿Can you analyze the graph?

flower vases	
basquets	
sunflowers	
daisies	
roses	

1. What is the total amount of flower vases?

- 10
- 3
- 5

2. How many more flower vases than basquets are there?

- 2
- 3
- 5

3. How many less roses than daisies are there?

- 5
- 9
- 4

4. Which one has the least amount?

- flower vases
- basquets
- roses

5. Which one has equal amount?

- sunflowers and daisies
- roses and flower vases
- flower vases and basquets

6. Which has the most amount?

- roses
- basquets
- sunflowers