
















Vamos a restar



					$5 - 3 = 2$
---	---	--	--	--	-------------



						$6 - 3 = \underline{\quad}$
--	---	---	--	--	--	-----------------------------

						$6 - 2 = \underline{\quad}$
--	---	---	---	--	--	-----------------------------

				$4 - 1 = \underline{\quad}$		
--	--	--	--	-----------------------------	--	--

						$6 - 4 = \underline{\quad}$
--	---	--	--	--	--	-----------------------------

					$5 - 2 = \underline{\quad}$	
--	---	---	--	--	-----------------------------	--

					$5 - 1 = \underline{\quad}$	
--	---	---	---	--	-----------------------------	--

