



Nombre: \_\_\_\_\_





# ¿Cuál pesa más?

Rellena el círculo de la cosa que pesa más.


1.



2.



3.



4.



5.

