
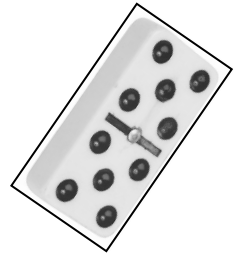


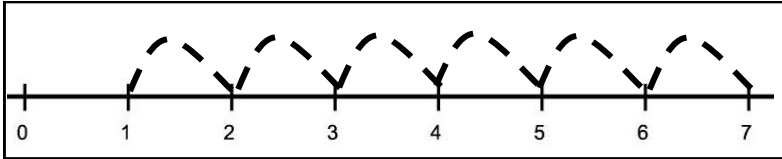
Name: _____



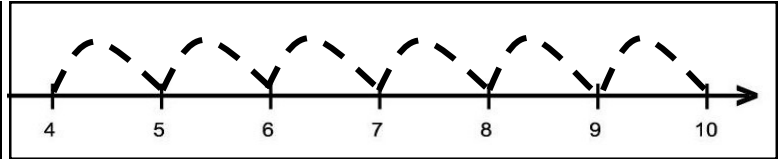
Adding Six



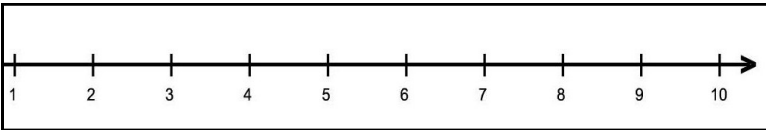
Using a Number Line



$$1 + 6 = 7$$



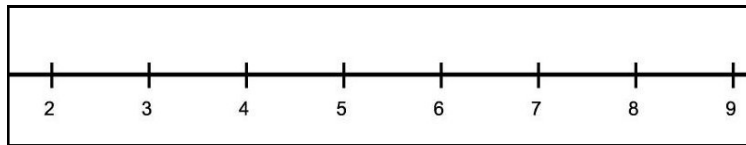
$$4 + 6 = 10$$



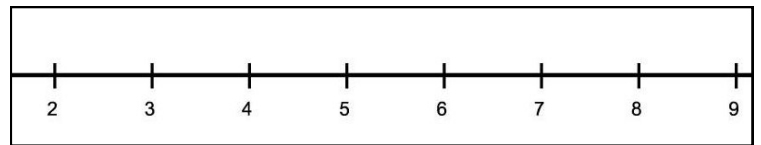
$$\begin{array}{r} 4 \\ + 6 \\ \hline \end{array}$$



$$\begin{array}{r} 1 \\ + 6 \\ \hline \end{array}$$



$$\begin{array}{r} 3 \\ + 6 \\ \hline \end{array}$$



$$\begin{array}{r} 2 \\ + 6 \\ \hline \end{array}$$



Score: _____