
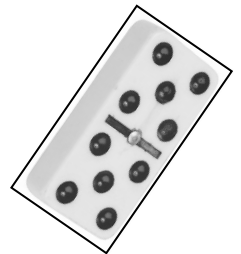


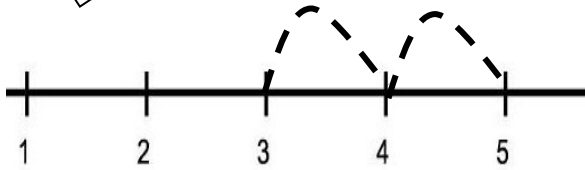
Name: \_\_\_\_\_



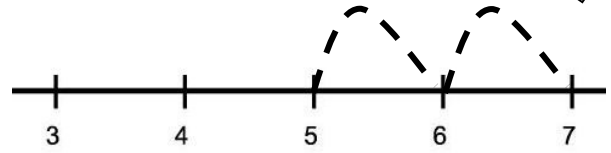
# Adding Two



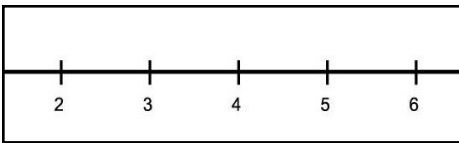
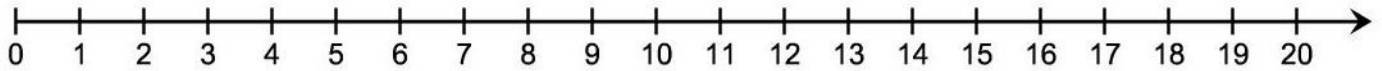
Using a Number Line



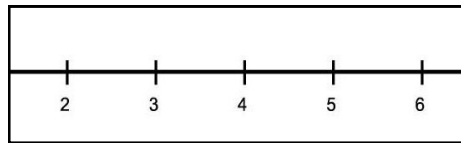
$$3 + 2 = 5$$



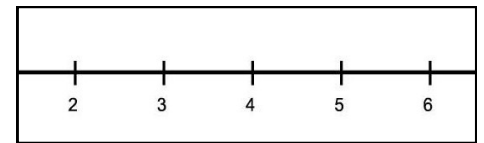
$$5 + 2 = 7$$



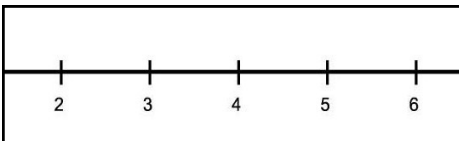
$$\begin{array}{r} 3 \\ + 2 \\ \hline \end{array}$$



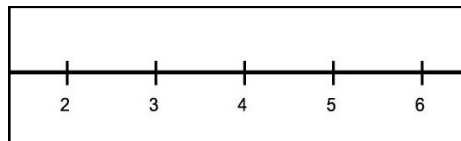
$$\begin{array}{r} 4 \\ + 2 \\ \hline \end{array}$$



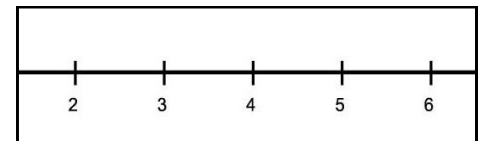
$$\begin{array}{r} 3 \\ + 2 \\ \hline \end{array}$$



$$\begin{array}{r} 2 \\ + 2 \\ \hline \end{array}$$



$$\begin{array}{r} 4 \\ + 2 \\ \hline \end{array}$$



$$\begin{array}{r} 3 \\ + 2 \\ \hline \end{array}$$



Score: \_\_\_\_\_