
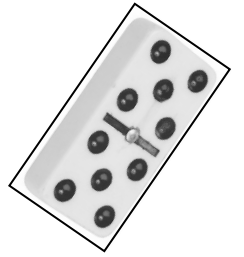


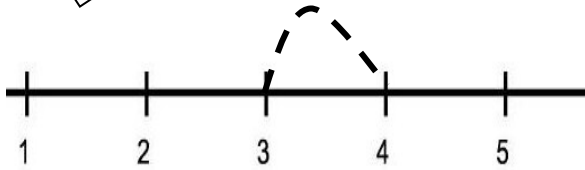
Name: _____



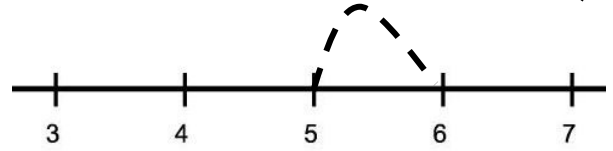
Adding One



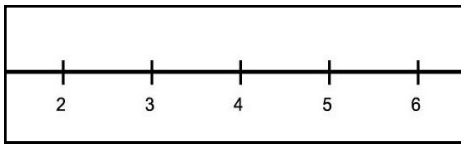
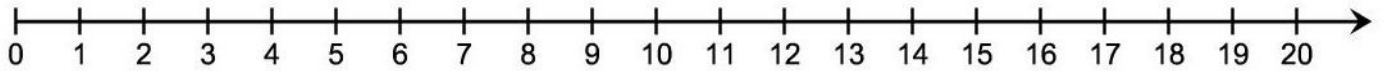
Using a Number Line



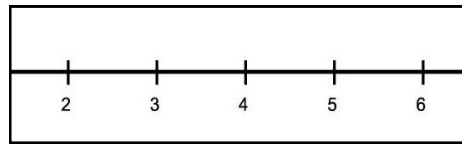
$$3 + 1 = 4$$



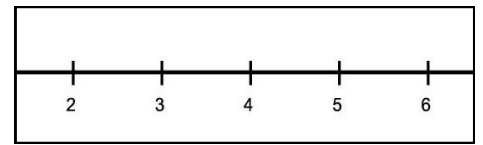
$$5 + 1 = 6$$



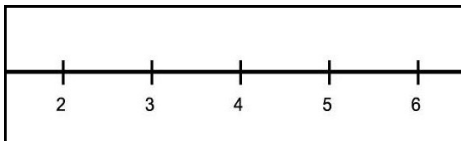
$$\begin{array}{r} 3 \\ + 1 \\ \hline \end{array}$$



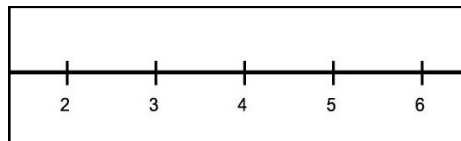
$$\begin{array}{r} 4 \\ + 1 \\ \hline \end{array}$$



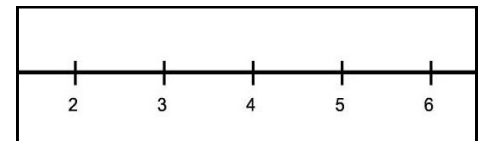
$$\begin{array}{r} 5 \\ + 1 \\ \hline \end{array}$$



$$\begin{array}{r} 3 \\ + 1 \\ \hline \end{array}$$



$$\begin{array}{r} 2 \\ + 1 \\ \hline \end{array}$$



$$\begin{array}{r} 4 \\ + 1 \\ \hline \end{array}$$



Score: _____