



Name \_\_\_\_\_

Look at the picture and analyze the graphs below.




Fill in the circle of the graph that shows the number of cupcakes.


A. ☐



B. ☐



C. ☐



Look at the graphs and answer the questions.

1. Which graph has the same amount?

- ☐ A and C
- ☐ B and A
- ☐ All of them
- ☐ None of them

2. Which graph has a total of 5 cupcakes?

- ☐ A
- ☐ B
- ☐ C
- ☐ A and B

3. Which graph has the least amount of cupcakes?

- ☐ A
- ☐ B
- ☐ C
- ☐ A and B