


Name _____



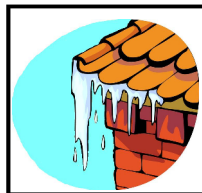

Water



Water can exist in 3 states: solid, such as snow and ice, liquid, such as rain, and gaseous such as water vapor. It is in a solid state at the two poles and in the high mountains. In rivers, lakes, clouds and as groundwater, it is usually found in a liquid state. The gaseous state of water is due to evaporation of heated water.

Most of the water on our planet is salt water and is found in the oceans and seas. Fresh water represents a very small proportion of our water and can be found in lakes, ponds and rivers.

1. Write the word that corresponds to each picture.



2. Color the water according to the key. Write their state in the box: S (solid), L (liquid) or G (gas).

salt water: green
fresh water: blue

